

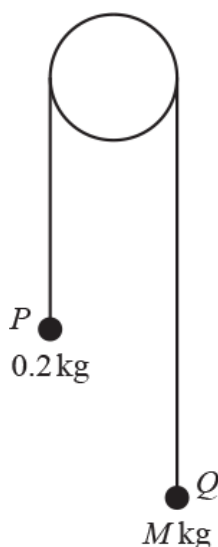
1. In this question the unit vectors \mathbf{i} and \mathbf{j} are in the directions east and north respectively.

Distance is measured in metres and time in seconds.

A ship of mass 100 000 kg is being towed by two tug boats. The cables attaching each tug to the ship are horizontal. One tug produces a force of $(350\mathbf{i} + 400\mathbf{j})$ N and the other tug produces a force of $(250\mathbf{i} - 400\mathbf{j})$ N. The total resistance to motion is 200 N. At the instant when the tugs begin to tow the ship, it is moving east at a speed of 1.5 m s^{-1} .

- (a) Explain why the ship continues to move directly east. [2]
- (b) Find the acceleration of the ship. [2]
- (c) Find the time which the ship takes to move 400 m while it is being towed. Find its speed after moving that distance. [6]

2.



Particles P and Q , of masses 0.2 kg and M kg respectively, where $M > 0.2$, are attached to the ends of a light inextensible string. The string passes over a smooth fixed pulley (see diagram). The system is in motion with the string taut and with each of the particles moving vertically.

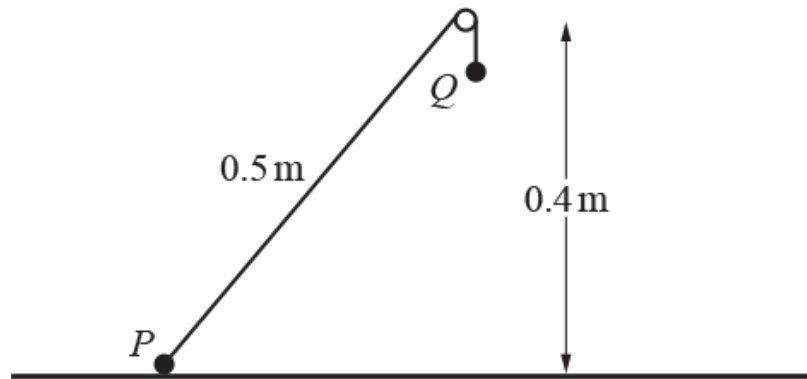
The tension in the string is 2.1 N.

- (a) Show that the acceleration of P is 0.7 m s^{-2} . [2]
- (b) Find the value of M . [2]
- (c) At one instant P has speed 0.3 m s^{-1} upwards. Find its speed 1.5 seconds later, assuming that it has not yet reached the pulley. [1]

3. In this question the horizontal unit vectors \mathbf{i} and \mathbf{j} are in the directions east and north respectively.
 A toy car of mass 0.5 kg is moving so that its acceleration vector $\mathbf{a} \text{ ms}^{-2}$ at time t seconds is given by
 $\mathbf{a} = 6t\mathbf{i} + (2 - 3t^2)\mathbf{j}$. When $t = 2$ the horizontal force acting on the car is $\mathbf{F} \text{ N}$.
 Find
- the magnitude of \mathbf{F} ,
 - the bearing of \mathbf{F} .

[5]

4.



A particle P of mass 0.4 kg is attached to one end of a light inextensible string. The string passes over a small smooth fixed pulley, and a particle Q of mass 0.1 kg is attached to the other end of the string. P rests in limiting equilibrium on a horizontal surface which is 0.4 m below the pulley, with the string taut and in the same vertical plane as P , Q and the pulley. P is 0.5 m from the pulley (see diagram).

- (i) Calculate the coefficient of friction and the magnitude of the contact force exerted on P by the surface. [7]

Q is now moved to the position on the surface below the pulley such that the portion of the string attached to Q is vertical. P hangs freely below the pulley and the portion of the string attached to P is vertical. Both particles are at rest when Q is released.

- (ii) Find the acceleration of the particles and the tension in the string while P is descending. [5]

P strikes the surface and remains at rest. Q comes to instantaneous rest immediately before reaching the pulley.

- (iii) Find the length of the string. [5]

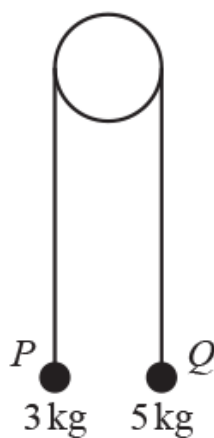
5. In this question the horizontal unit vectors \mathbf{i} and \mathbf{j} are in the directions east and north respectively.

A model ship of mass 2 kg is moving so that its acceleration vector \mathbf{a} ms^{-2} at time t seconds is given by $\mathbf{a} = 3(2t - 5)\mathbf{i} + 4\mathbf{j}$. When $t = T$, the magnitude of the horizontal force acting on the ship is 10 N.

Find the possible values of T .

[4]

6. Particles P and Q , of masses 3 kg and 5 kg respectively, are attached to the ends of a light inextensible string. The string passes over a smooth fixed pulley. The system is held at rest with the string taut. The hanging parts of the string are vertical and P and Q are above a horizontal plane (see diagram).



- (a) Find the tension in the string immediately after the particles are released.

[4]

After descending 2.5 m, Q strikes the plane and is immediately brought to rest. It is given that P does not reach the pulley in the subsequent motion.

- (b) Find the distance travelled by P between the instant when Q strikes the plane and the instant when the string becomes taut again.

[4]

END OF QUESTION paper

Mark scheme

Question		Answer/Indicative content	Marks	Guidance
1	a	Resultant force from the tug boats is positive so it is moving east There is zero resultant force in the j direction, so it is not moving north or south	E1(AO2.2a) E1(AO2.2a) [2]	(600i)
	b	$350 + 250 - 200 = 100000a$ Obtain 0.004 m s^{-2}	M1(AO3.3) A1(AO1.1) [2]	Use $F = ma$. Allow sign errors and one missing force
	c	$400 = 1.5t + \frac{1}{2}(0.004)t^2$ $0.002t^2 + 1.5t - 400 = 0$ Obtain 209 (seconds) $v^2 = 1.5^2 + 2(0.004)(400)$ Obtain $2.33 \text{ (m s}^{-1}\text{)}$	M1(AO3.1b) A1(AO1.1) M1(AO3.4) A1(AO1.1) M1(AO3.4) A1(AO1.1) [6]	Use $s = ut + \frac{1}{2}at^2$ Obtain correct quadratic. Any equivalent form Use any method to solve their quadratic If negative root given (-958.63088) this must be clearly discarded Use $v^2 = u^2 + 2as$ with their a or $v = u + at$ with their a and t Accept better (2.3345235) Including BC Accept better (208.630877) but not 208
Total			10	
2	a	$T - 0.2g = 0.2a$ $a = \frac{2.1 - 0.2 \times 9.8}{0.2} = \frac{0.14}{0.2} = 0.7$	M1 (AO3.3) E1 (AO1.1) [2]	Attempt N2L for P AG Must include sufficient working

						to justify the given answer
		b	$Mg - T = Ma$ $M = 0.231$ (3 sf)	M1 (AO3.3) A1 (AO1.1) [2]	Attempt N2L for Q	0.23076923...
		c	$v = 0.3 + 0.7 \times 1.5 = 1.35 \text{ m s}^{-1}$	B1 (AO3.4) [1]	Use of $v = u + at$ with given information	
			Total	5		
3			$a = 12i - 10j$ $F = 0.5\sqrt{(12)^2 + (-10)^2}$ $F = 7.81 \text{ N}$ $90 + \tan^{-1}\left(\frac{5}{6}\right)$ $= 130^\circ$	B1 (AO1.1) M1 (AO3.3) A1FT (AO3.4) M1 (AO3.1a) A1 (AO1.1) [5]	Substitute $t = 2$ Use of $F = ma$ and Pythagoras FT their a at $t = 2$ $90 + \tan^{-1}\left(\frac{y}{x}\right)$ to give a 3-figure bearing	
			Total	5		
4		i	$\sin\theta = 0.4/0.5$ or $\cos\theta = 0.3/0.5$ $T = 0.1g (= 0.98) \text{ N}$ $Fr = T\cos\theta (= 0.588)$ $R = 0.4g - T\sin\theta (= 3.136)$	B1 B1 M1 M1	θ is angle between string and horizontal CorS. T , angle do not have to be numerical SorC. T , angle do	If two values of T are employed, award B1 for $0.1g$ associated with Q .

		$\mu (= 0.588 / 3.136) = 3/16$ or 0.1875 $C^2 = 0.588^2 + 3.136^2$ $C = 3.19$ N	A1 M1 A1 [7]	<table border="1"> <tr> <td>not have to be numerical with 0.4g</td> <td>R must be a difference of forces</td> </tr> <tr> <td>0.187 or 0.188</td> <td></td> </tr> <tr> <td>Must have two non-zero numerical values</td> <td></td> </tr> </table>	not have to be numerical with 0.4g	R must be a difference of forces	0.187 or 0.188		Must have two non-zero numerical values	
not have to be numerical with 0.4g	R must be a difference of forces									
0.187 or 0.188										
Must have two non-zero numerical values										
	ii	$0.4g - T = 0.4a$ $T - 0.1g = 0.1a$ $0.3g = 0.5a$ OR $0.4g - 0.1g = 0.4a + 0.1a$ $a = 5.88$ m s ⁻² $T = 1.568$ N = 1.57 N	M1 A1 M1 A1 A1 [5]	<table border="1"> <tr> <td>N2L for either particle, no components</td> <td>Finding a correctly from the combined equation gets M1A1. Using a in an N2L equation for P or Q can get M1, and obtaining the correct value of T gets A1, hence 4 marks out of 5</td> </tr> <tr> <td>Both equations correct</td> <td></td> </tr> <tr> <td>Solves two simultaneous equations</td> <td></td> </tr> </table> <p>Examiner's Comments In part (ii) many fully correct solutions were found, and the most common error was to omit an answer for the tension.</p>	N2L for either particle, no components	Finding a correctly from the combined equation gets M1A1. Using a in an N2L equation for P or Q can get M1, and obtaining the correct value of T gets A1, hence 4 marks out of 5	Both equations correct		Solves two simultaneous equations	
N2L for either particle, no components	Finding a correctly from the combined equation gets M1A1. Using a in an N2L equation for P or Q can get M1, and obtaining the correct value of T gets A1, hence 4 marks out of 5									
Both equations correct										
Solves two simultaneous equations										
	iii	P descends = x m (= $(2 \times 0.4 - l)$ m) $v^2 = 2 \times 5.88x (= 11.76x)$ $0 = v^2 - 2g(0.4 - x)$ $x = 0.25$ String is 0.8 - 0.25 m long $l = 0.55$ m OR (P starts d m below pulley)	M1 M1 A1 M1 A1 [5]	<table border="1"> <tr> <td>P and Q moving together</td> <td>Eqn has two unknowns</td> </tr> <tr> <td>Q rising alone</td> <td>Eqn has two unknowns</td> </tr> </table>	P and Q moving together	Eqn has two unknowns	Q rising alone	Eqn has two unknowns		
P and Q moving together	Eqn has two unknowns									
Q rising alone	Eqn has two unknowns									

		$v^2 = 2 \times 5.88(0.4 - d)$ $v^2 = 2gd$ $d = 0.15$ String is 0.4+0.15 m long $l = 0.55$ m	M1 M1 A1 M1 A1	<div style="border: 1px solid black; padding: 5px;"> <p>P and Q moving together</p> <p>Q rising alone</p> </div> <div style="border: 1px solid black; padding: 5px; margin-left: 20px;"> <p>Eqn has two unknowns</p> <p>Eqn has two unknowns</p> </div>
		Total	17	<p>Examiner's Comments</p> <p>Part (iii) was challenging for most, setting up and solving two simultaneous $v^2 = u^2 + 2as$ equations being unfamiliar.</p>
5		$F = \sqrt{36(2T - 5)^2 + 64}$ $36(2T - 5)^2 = 36$ $2T - 5 = \pm 1 \Rightarrow T = \dots$ $T = 2$ and $T = 3$	M1* (AO 3.3) A1 (AO 1.1) Dep*M1 (AO 1.1) A1 (AO 2.2a) [4]	<div style="border: 1px solid black; padding: 5px;"> <p>Correct use of $F = ma$ and Pythagoras</p> <p>Correct equation(s) for both values of T e.g.</p> <div style="border: 1px solid black; padding: 5px; margin: 5px auto; width: fit-content;"> $10 = 2\sqrt{9(2T - 5)^2 + 64}$ </div> <p>Attempt to solve a quadratic leading to at least one value for T</p> </div> <div style="border: 1px solid black; padding: 5px; margin-left: 20px;"> <p>Allow t throughout</p> </div>
		Total	4	<p>Examiner's Comments</p> <p>This question proved to be challenging for the majority of candidates. The need to find the magnitude of the acceleration was not well understood. For those who did use it, algebraic and numerical errors sometimes marred the solution. $(\pm)10 = 2(3(2t - 5) + 4j)$ was common, even when the correct methods then followed, but in many cases equations like $10 = 12t - 30$ were used. A number of candidates ignored the mass and $F = a$ pursued.</p>

6	a	$T - 3g = 3a$ $5g - T = 5a$ $5g - T = 5\left(\frac{T - 3g}{3}\right) \Rightarrow T = \dots$ $T = 36.75 \text{ (N)}$	<p>M1* (AO 3.3)</p> <p>A1 (AO 1.1)</p> <p>Dep*M1 (AO 1.1)</p> <p>A1 (AO 1.1)</p> <p>[4]</p>	<p>Attempt N2L for P and Q – three terms, mass required, condone sign errors</p> <p>Eliminate a and attempt to solve for T</p> <p>Accept $\frac{15}{4}$, 36.8</p>	<p>M0 for $a = 0$ or $\pm g$</p>
	b	$a = 2.45 \text{ ms}^{-2}$ $v^2 = 0 + 2(2.45)(2.5)$ $0 = 12.25 + 2h(-g)$ $(2h =) 1.25 \text{ (m)}$	<p>B1 (AO 3.4)</p> <p>M1* (AO 3.3)</p> <p>Dep*M1 (AO 3.3)</p> <p>A1 (AO 1.1)</p> <p>[4]</p>	<p>0.25g</p> <p>Use of $v^2 = u^2 + 2as$ for P with $u = 0$</p> <p>Use of $v^2 = u^2 + 2as$ for P with $v = 0$</p> <p>oe</p>	<p>M0 for $a = 0$ or $\pm g$</p> <p>$a = \pm g$</p>
		<p>Total</p>	<p>8</p>		