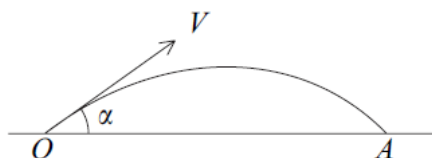


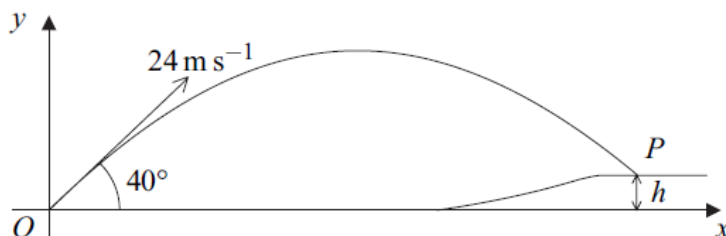
## Projectiles Questions

- 5 A golf ball is projected from a point  $O$  with initial velocity  $V$  at an angle  $\alpha$  to the horizontal. The ball first hits the ground at a point  $A$  which is at the same horizontal level as  $O$ , as shown in the diagram.



It is given that  $V \cos \alpha = 6u$  and  $V \sin \alpha = 2.5u$ .

- (a) Show that the time taken for the ball to travel from  $O$  to  $A$  is  $\frac{5u}{g}$ . (4 marks)
- (b) Find, in terms of  $g$  and  $u$ , the distance  $OA$ . (2 marks)
- (c) Find  $V$ , in terms of  $u$ . (2 marks)
- (d) State, in terms of  $u$ , the least speed of the ball during its flight from  $O$  to  $A$ . (1 mark)
- 
- 7 A golf ball is struck from a point  $O$  with velocity  $24 \text{ m s}^{-1}$  at an angle of  $40^\circ$  to the horizontal. The ball first hits the ground at a point  $P$ , which is at a height  $h$  metres above the level of  $O$ .



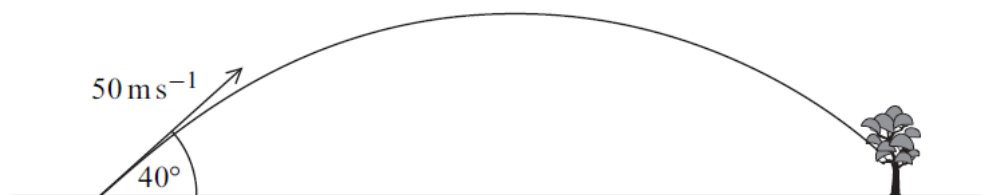
The horizontal distance between  $O$  and  $P$  is 57 metres.

- (a) Show that the time that the ball takes to travel from  $O$  to  $P$  is 3.10 seconds, correct to three significant figures. (3 marks)
- (b) Find the value of  $h$ . (3 marks)
- (c) (i) Find the speed with which the ball hits the ground at  $P$ . (5 marks)
- (ii) Find the angle between the direction of motion and the horizontal as the ball hits the ground at  $P$ . (2 marks)
-

- 7 A golf ball is struck from a point on horizontal ground so that it has an initial velocity of  $50 \text{ m s}^{-1}$  at an angle of  $40^\circ$  above the horizontal.

Assume that the golf ball is a particle and its weight is the only force that acts on it once it is moving.

- (a) Find the maximum height of the golf ball. (4 marks)
- (b) After it has reached its maximum height, the golf ball descends but hits a tree at a point which is at a height of 6 metres above ground level.



Find the time that it takes for the ball to travel from the point where it was struck to the tree. (6 marks)

---

- 7 An arrow is fired from a point  $A$  with a velocity of  $25 \text{ m s}^{-1}$ , at an angle of  $40^\circ$  above the horizontal. The arrow hits a target at the point  $B$  which is at the same level as the point  $A$ , as shown in the diagram.



- (a) State **two** assumptions that you should make in order to model the motion of the arrow. (2 marks)
- (b) Show that the time that it takes for the arrow to travel from  $A$  to  $B$  is 3.28 seconds, correct to three significant figures. (4 marks)
- (c) Find the distance between the points  $A$  and  $B$ . (2 marks)
- (d) State the magnitude and direction of the velocity of the arrow when it hits the target. (2 marks)
- (e) Find the minimum speed of the arrow during its flight. (2 marks)
-

## Projectiles Answers

5(a)	$s = ut + \frac{1}{2}at^2$ $0 = 2\frac{1}{2}ut - \frac{1}{2}gt^2$ $0 = t\left(2\frac{1}{2}u - \frac{1}{2}gt\right)$ $t = \frac{5u}{g}$	M1 A1 m1  A1	4	full method required for time (equation of motion, or standard result)  (if $g = 9.8$ used, lose last A1)
(b)	$OA = 6u \times \frac{5u}{g}$ $= \frac{30u^2}{g}$	M1  A1	2	cao
(c)	$\text{speed}^2 = (6u)^2 + \left(2\frac{1}{2}u\right)^2$ $\text{speed} = 6\frac{1}{2}u$	M1  A1	2	cao
(d)	Least speed, at top, = $6u$	B1	1	
<b>Total</b>			<b>9</b>	

7(a)	$57 = 24 \cos 40^\circ \times t$ $t = 3.10 \text{ sec}$	M1 A1 A1	3	Component attempted and acceleration = 0 All correct CAO
(b)	$h = 24 \sin 40^\circ \times 3.1 - \frac{1}{2} \times 9.8 \times 3.1^2$ $h = 0.734 \text{ m}$	M1 A1 A1F	3	Component attempted & acceleration = 9.8 All correct FT one slip e.g. +9.8 used Accept 2 s.f. answer, AWRT 0.71–0.74
(c)(i)	horizontal, $u = 24 \cos 40^\circ = 18.39 \text{ ms}^{-1}$ vertical, $v = 24 \sin 40^\circ - 9.8 \times 3.1$ $v = -14.95 \text{ ms}^{-1}$ $V = \sqrt{(18.39)^2 + (-14.95)^2}$ $V = 23.7 \text{ ms}^{-1}$	B1 M1 A1 M1  A1F	5	Seen anywhere in (c) accept 18.4 Component attempted & acceleration = 9.8 (Accept -15.0) Use of candidate's $u$ and new $v$ (when $t = 3.1$ ) FT use of candidate's $u$ and $v$ and new $v$ when $t = 3.1$
(ii)	$\tan \theta = \frac{14.95}{18.39}$ $\theta = 39.1^\circ \text{ or } 39.2^\circ$ } accept $\pm$ Also $140.8^\circ$ or $140.9^\circ$	M1  A1F	2	Use of candidate's $u$ and $v$ Accept inverted ratio FT use of candidates $u$ and $v$ and $V$
<b>Total</b>			<b>13</b>	

7(a)	$0^2 = (50 \sin 40^\circ)^2 + 2 \times (-9.8)h$ $h = \frac{(50 \sin 40^\circ)^2}{2 \times 9.8} = 52.7$ <p><b>Alt</b></p> $0 = 50 \sin 40^\circ - 9.8t$ $t = \frac{50 \sin 40^\circ}{9.8} = 3.280$ $h = 50 \sin 40^\circ \times 3.280 - \frac{1}{2} \times 9.8 \times 3.280^2$ $= 52.7$ <p>ALLOW 52.6</p>	M1A1  dM1 A1  (M1) (A1) (dM1) (A1)	4	Equation for $h$ with $v = 0$ and a component of velocity. Correct equation Solving for $h$ Correct $h$  Equation for $t$ with $v = 0$ and a component of velocity Correct $t$  Expression for $h$ with a component of velocity Correct $h$
(b)	$6 = 50 \sin 40^\circ t - 4.9t^2$ $0 = 4.9t^2 - 50 \sin 40^\circ t + 6$ $t = \frac{50 \sin 40^\circ \pm \sqrt{(50 \sin 40^\circ)^2 - 4 \times 4.9 \times 6}}{2 \times 4.9}$	M1A1  A1 dM1	6	Forming a quadratic in $t$ . Correct terms with any signs  Correct equation  Solving quadratic  Correct solution selected  Finding two times Equation for time to go down Correct time Time to go up Correct total
	$= 0.192 \text{ or } 6.37$ $t = 6.37$ <p><b>Alt</b></p> $46.7 = 4.9t_1^2$ $t_1 = 3.087$ $t_2 = 3.280$ $t = 3.087 + 3.280 = 6.37$	A2  (M1) (dM1) (A1) (A1) (A2)	6	
<b>Total</b>		<b>10</b>		

7(a)	A particle or no spin No air resistance or no wind or only gravity acting	B1 B1	2	First assumption Second assumption  If more than 2 assumptions given, subtract one mark for each incorrect additional assumption
(b)	$0 = 25 \sin 40^\circ t - 4.9t^2$ $0 = t(25 \sin 40^\circ - 4.9t)$ $t = 0$ or $t = \frac{25 \sin 40^\circ}{4.9}$ Time of flight = 3.28 s	M1 A1 dM1		Equation for time of flight Correct equation Solving for $t$
(c)	$s = 3.28 \times 25 \cos 40^\circ = 62.8$ m	A1	4	AG Correct final answer from correct working (Verification method M1A1M1A0) Finding range
(d)	$25 \text{ ms}^{-1}$ at $40^\circ$ below the horizontal	M1 A1	2	Correct range
(e)	$v_{\min} = 25 \cos 40^\circ = 19.2 \text{ ms}^{-1}$ <b>OR</b> $v_{\min} = \frac{62.807}{3.2795} = 19.2 \text{ ms}^{-1}$	B1 B1 M1 A1	2 2 2 2	Speed Direction Horizontal component of velocity Correct speed Accept $19.1 \text{ ms}^{-1}$
<b>Total</b>			<b>12</b>	